

Name: _____

Student Number: _____

Class: _____

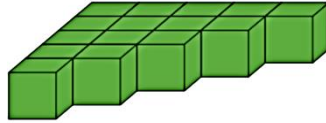
Date: _____

Score: _____

Teacher: _____

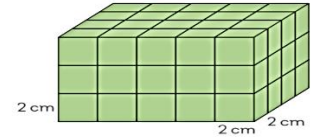
Answer the following. No erasure.

The solid is made up of 1-m cubes.
Find the volume of the solid.



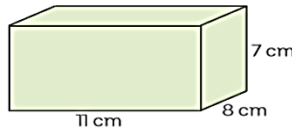
Working:

The cuboid is made up of 2-cm cubes.
Find the volume of the cuboid.



Working:

The cuboid has length 11 cm, breadth 8 cm and height 7 cm. Find the volume of the cuboid.



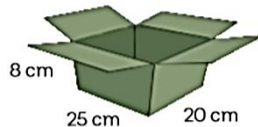
Working:

The block of clay has the shape of a cube with edge 14 cm. Find the volume of the clay.




Working:

The box has the shape of a cuboid 25 cm by 20 cm by 8 cm. Find the capacity of the box.



Working:

A rectangular stage inside a hall is 9 m long 4 m wide 1.2 m high. Find the volume of the stage.



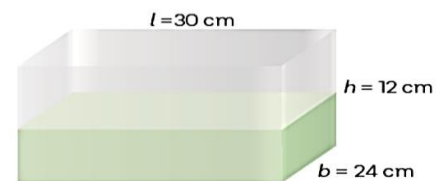
Working:

Find the volume.



Working:

Find the volume.



Working:

